

Greater Than and Less Than

Put < or > between the number pairs below.

a) 12 15

b) 30 22

c) 100 91

d) 46 41

e) 22 18

f) 64 46

g) 92 20

h) 22 20






i) 70 67

j) 25 30

k) 30 24

l) 21 11

Great! Now try with pictures.



Add a number in the spaces below to make the problem correct.

a) 22 <

b) 14 >

c) 82 <

d) 97 >

e) 17 <

f) 28 >

g) 99 <

h) 33 >

i) 50 >

j) 66 <

k) 76 >

l) 52 <

m) 60 >

n) 72 <

o) 4 >

p) 81 <