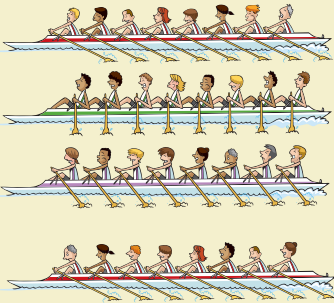



Multiplying and dividing by 4 and 8

Each boat in a race has 8 rowers.
Write the number of rowers in each race.


1



2



3



4 6 boats

5 8 boats

6 7 boats

Complete the multiplication facts.

7 $\times 8 = 24$

10 $5 \times$ $= 40$

13 $\times 8 = 72$

8 $10 \times$ $= 80$

11 $\times 8 = 56$

14 $\times 8 = 48$

9 $\times 8 = 32$

12 $8 \times$ $= 64$

15 $\times 8 = 96$

Find the missing numbers.

16 boats will need 16 rowers.

17 12 boats will need rowers.

18 boats will need 88 rowers.

19 8 boats will need rowers.



I am confident with the 8 times-table.