

Week 2




Diary of a Mermaid

5 Dear Diary

Friday 12th June

18 Today was the first day of summer. I woke up early to see
27 the bright, beautiful sunshine. Mother asked me to visit
40 my grandma on the other side of the bay. On the way, I
49 swam very quietly past the creepy shipwreck where the
59 grumpy, old shark lives. I didn't want to wake him
70 because I have heard that he is very snappy! I also
79 collected some beautiful shells to cheer up Grandma. At
88 Grandma's house, she looked very poorly but the shells
100 cheered her up. On the way home, I sung a happy tune
109 that Grandma had taught me. Unfortunately, I forgot to
115 swim quietly past the spooky shipwreck...



Quick Questions



1. Who did the mermaid go to visit?



2. Find and copy the expanded noun phrase used to describe the sunshine.



3. Explain why the mermaid swam quietly past the creepy shipwreck.



4. What do you think might happen next?



Dilly and the Three Monsters

11 Once upon a time, there lived a small boy called Dilly.
22 One day, Dilly went for a walk in the mountains and
32 found a cave made from chocolate. He knocked on the
42 wall but nobody answered so he went inside. At the
52 table, there were three bowls of hot soup. Dilly tasted
63 the soup from the large bowl. "This soup is too thick!"
73 he cried. He tasted the soup from the medium bowl.
83 "This soup is too lumpy!" he moaned. Then, he tasted
94 the soup from the small bowl. This soup was just right
106 so he ate it all up. As he was eating, the three
115 monsters came home. Dilly was so surprised that he
125 jumped over the table and ran all the way home.

Quick Questions



1. What did Dilly find in the mountains?



2. Why do you think that Dilly ran all the way home after meeting the monsters?



3. Find and copy **two** words from the text that the author has used instead of 'said'.



4. Number these lines from 1 to 3 to show the order that they appear in the text.

This soup was just right.

This soup is too thick.

This soup is too lumpy.

'ew' Spelling Activity

1. Trace over 'ew'.

ew ew ew ew ew
ew ew ew ew ew

2. Just add 'ew'.

st__

cr__

scr__

ch__

j__el

n__spaper

thr__

neph__

3. Write the correct 'ew' words under the pictures.





'ph' Spelling Activity


1. Trace over 'ph'.

ph ph ph ph ph
ph ph ph ph ph

2. Just add 'ph'.

___one tro___y
___onics al___abet
s___ere gra___
ele___ant dol___in

3. Write the correct 'ph' words under the pictures.



A B C



Draw three lines to name the types of sentences.



a

What lovely little lambs skipping about!

question

There are two beautiful lambs.

exclamation

Do you like them?

statement

Circle the correct homophone for each picture.

b



son / sun



son / sun



ate / eight



ate / eight

Underline the adjectives in this sentence.

c

Joseph thought the crunchy, orange carrots looked delicious.



Change these words into nouns by adding the suffix **-er** or **-ness**.

d

hike happy

Remember, you may need to make changes.

Oops, Mr Whoops has made two punctuation mistakes. Help him by correcting his comma and apostrophe.

e

Esme Zeba, and, Z'ebas dog travelled on the train on Thursday.



Extend this sentence using the conjunction 'but'. Write the whole new sentence in full.

f

The steak was on the floor...



a
Circle the conjunction in each of these sentences.

The chocolate eggs melted when she left them out in the sun.

We were wondering if we would have a surprise.



b
Write these verbs in the past tense:

run hop skip




c
Underline the expanded noun phrases.

They were selling some cute, fluffy kittens.

The wild, striped tigers were running free.



d
Which year 2 common exception word has Mr Whoops been juggling with?

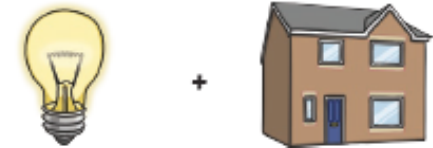


e
Find the hidden words.

badge	j	j	a	c	k	e	t
fudge	a	d	j	u	f	f	m
village	c	t	d	u	f	f	f
giraffe	t	s	u	j	d	a	u
jacket	e	g	d	a	b	r	d
adjust	t	o	c	o	i	i	g
	v	i	l	l	a	g	e

f
Use the picture clues to write the compound words.





Section 1

Find the missing numbers:

$$25 + \boxed{} = 100$$

$$\boxed{} + 52 = 100$$

Section 2

What's my number?



I have 2 digits.

I am even.

My tens digit is half of 16.

My ones digit is between 3 and 6.

Section 3

I have 42 sweets and I share them between my 2 friends. How many will they each have?



Section 5

What time is the clock showing?



Section 7

Write down 2 facts about triangles.

.....

.....

.....

.....

.....

Section 4

Make £2.30 using the fewest number of coins.

Section 6

Write these numbers in words:

251

.....

310

.....

446

.....

Section 8

I have 12 shoes. I want to put each pair into its own box. How many boxes will I need?



Section 1

Use the correct sign $<$ or $>$ to make these true:

$15 \square 20 \quad 13 \square 8$

Section 2

What are the missing numbers?

0	5	10			25	30	
---	---	----	--	--	----	----	--

Section 3

Billy has 34 football cards. Max has 22 more. How many cards has Max got?



Section 4

Which number is the odd one out?
Explain how you know.

18 26
82 15 74

.....
.....

Section 6

Dance class starts at half past 9. It takes half an hour to get there. What time does Kim need to set off, to get there on time?

Section 5

Kate eats $\frac{1}{4}$ of a pizza. What fraction of the pizza is left?



Section 7

How much juice is in the jug?



Section 8


Are these correct? If not, can you make them right?

$12 + 52 = 74$

$106 - 13 = 91$

$48 - 15 = 33$

Colour by Multiplication



6	white
9	light pink
12	yellow
15	peach
18	red
21	orange
24	green
27	blue
30	purple

100 Square

1	2	3	4	5	6	7	8	9	10
11	12	13	14	15	16	17	18	19	20
21	22	23	24	25	26	27	28	29	30
31	32	33	34	35	36	37	38	39	40
41	42	43	44	45	46	47	48	49	50
51	52	53	54	55	56	57	58	59	60
61	62	63	64	65	66	67	68	69	70
71	72	73	74	75	76	77	78	79	80
81	82	83	84	85	86	87	88	89	90
91	92	93	94	95	96	97	98	99	100