

Year 3 Spring 1 Maths Activity Mat 2

Section 1

A tree is 12m tall. The one next to it is three times taller. How tall is that tree?

Section 2

Calculate:

$$240 \div 4 = \square$$

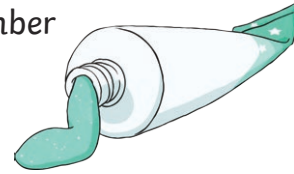
$$320 \div 8 = \square$$

$$400 \div 5 = \square$$

Section 3

Tubes of toothpaste weigh 80g. What is the total weight of eight toothpaste tubes?

Write a number statement.



Section 4

Use the column method to work out: $175 + 36 =$

Section 5

I think of a number.

I halve it.

I add 8.

The answer is 12.

What was my number?

Section 6

$$\square + 35 = 100$$


$$28 \div \square = 4$$

Section 7

Draw a diagram to show a shape cut into six pieces, with a third shaded.

Section 8

Find $\frac{1}{4}$ of 32.



Year 3 Spring 1 Maths Activity Mat 2 - Answers

Section 1

A tree is 12m tall. The one next to it is three times taller. How tall is that tree?

36m

Section 2

Calculate:

$$240 \div 4 = 60$$

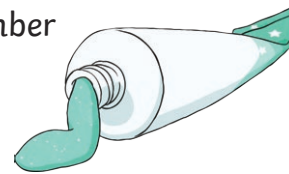
$$320 \div 8 = 40$$

$$400 \div 5 = 80$$

Section 3

Tubes of toothpaste weigh 80g. What is the total weight of eight toothpaste tubes?

Write a number statement.



$$80g \times 8 = 640g$$

Section 4

Use the column method to work out: $175 + 36 =$

$$\begin{array}{r} 175 \\ + 36 \\ \hline 211 \end{array}$$

Section 5

I think of a number.

I halve it.

I add 8.

The answer is 12.

What was my number?

8

Section 6

$$65 + 35 = 100$$

$$28 \div 7 = 4$$


Section 7

Draw a diagram to show a shape cut into six pieces, with a third shaded.

A shape with two pieces shaded.

Section 8

Find $\frac{1}{4}$ of 32.



8