


Dear children,

I hope you are all keeping safe and well. It is very strange not seeing you all at school! Here are some activities for you to complete at home. Don't forget to practice your reading too, and try to keep active, as much as you can!

Hope to see you soon,


Mrs Mansell



Reading Comprehension

Three Key Words

Read the sentence and colour the picture.




1. The sun is bright and yellow.
2. The sun has orange rays.
3. The sheep has black legs.
4. The fields are light green and dark green.
5. The sheep has white wool.

Reading Comprehension

Three Key Words

Read the sentence and colour the picture.







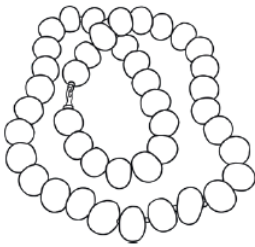

1. My egg is green and grey.
2. My body is yellow and orange.
3. My beak is black and pink.
4. The other egg is brown.
5. There is a crack on the brown egg.


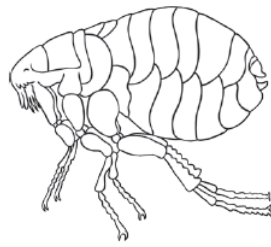
Find and Write the 'ea' Words






























Write the words and then colour the pictures with an 'ea' sound in them.

 <input type="text"/> <input type="text"/>	 <input type="text"/> <input type="text"/> <input type="text"/>	 <input type="text"/> <input type="text"/> <input type="text"/>
--------------------------------------------------------------------------------------------------------------------------------	-----------------------------------------------------------------------------------------------------------------------------------------------------	-------------------------------------------------------------------------------------------------------------------------------------------------------

 <input type="text"/> <input type="text"/> <input type="text"/>	 <input type="text"/> <input type="text"/> <input type="text"/> <input type="text"/>	 <input type="text"/> <input type="text"/> <input type="text"/>
------------------------------------------------------------------------------------------------------------------------------------------------------	---------------------------------------------------------------------------------------------------------------------------------------------------------------------------	--------------------------------------------------------------------------------------------------------------------------------------------------------

Alternative Spellings for ai

ai		ay		a-e	
					
					
					
					
					
					
					
					
					

Tick the correct type of sentence. **a**

What a great day we had at the zoo!

exclamation

command



Change these adjectives into adverbs using the suffix 'ly'. **c**

quiet _____

slow _____



Write a word with an apostrophe to show who this could belong to. **e**



Match these words to their opposites: **b**

happy

uneven

kind

unhappy

even

unkind

Re-write this sentence with the correct tense of the missing word. **d**

I will _____ on the chair.

sitting sit sat



Oops, Mr Whoops has spelt these common exception words backwards! Write them correctly four times to help him. **f**

rood _____

dnif _____

tsom _____



a
Add the correct conjunction to this sentence.

and or but

Choose one _____ I'll choose it for you.



c
What type of word is 'dark' in this sentence? Circle one.

The room was dark.

adjective

noun

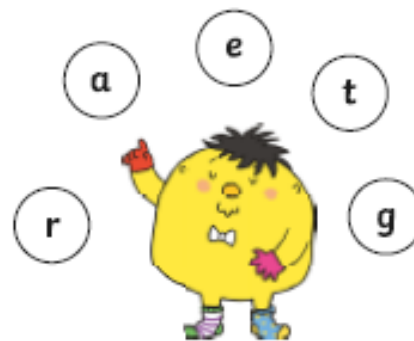
verb



e
Find the hidden words.

steak	t	y	p	e	r	q	o
old	h	s	t	e	a	k	l
pretty	u	a	o	y	n	l	d
sure	l	b	l	e	s	n	o
half	x	y	c	f	u	r	u
eye	y	t	t	e	r	p	r
	c	n	v	m	e	e	e

d
Which year 2 common exception word has Mr Whoops been juggling with?



b
Use these words to make two new compound words.

man end door
week super

f
Use these noun phrases and adjectives to write a sentence with two expanded noun phrases.

a dog brown furry
that girl little pretty



Tick the correct type of sentence. **a**

Be quiet, Peter!

- exclamation
 command
 statement



Change these adjectives into adverbs using the suffix 'ly'. **c**



harsh _____
quick _____
excited _____

Re-write this sentence with the correct tense of the missing word. **e**

Lucy is _____ TV with her brothers, David and Kaleb.

watching watch watched

Write the opposites to these words by adding the prefix 'un'. **b**

lock _____

tidy _____

load _____

Complete this sentence using one contraction word with an apostrophe in place of a missing letter. **d**

_____ Sunday tomorrow.



Oops, Mr Whoops has spelt these common exception words backwards! Write them correctly four times to help him. **f**



roolf _____

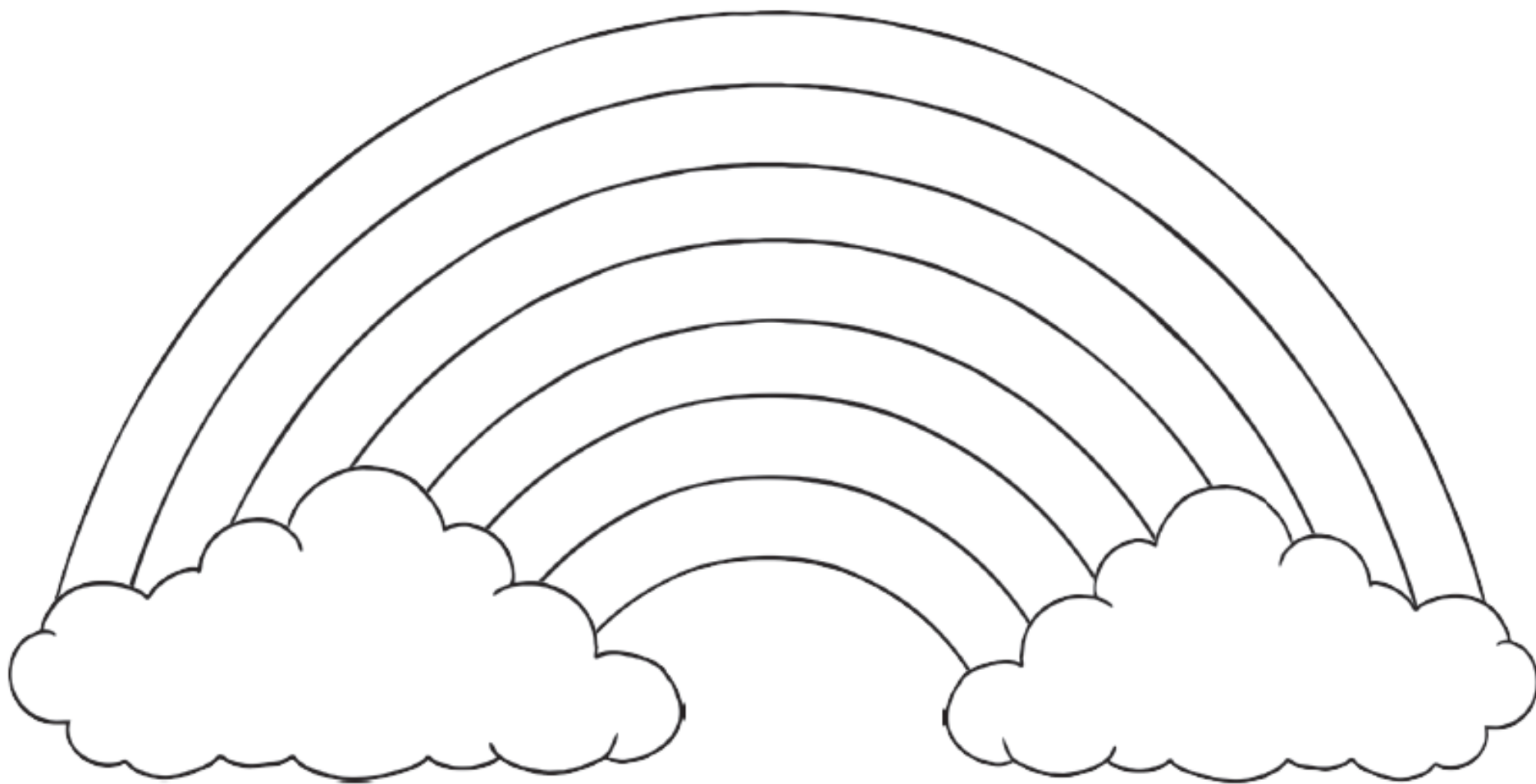
tsap _____

yna _____

dlot _____

All about Me Rainbow

Write an adjective to describe yourself in each part of the rainbow.
Then, colour them in to show your colourful personality.



Section 1

Write three numbers greater than 40, using the numbers on the cards.

3	7	5	2

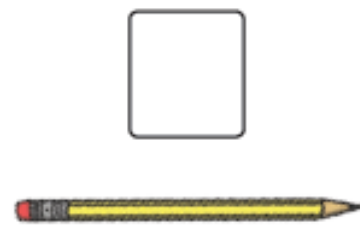
Section 2

Use the signs $>$ $<$ to show the most and least amount.

39	<input type="text"/>	57
£1.45	<input type="text"/>	£1.36
$24+9$	<input type="text"/>	31

Section 3

18 is seven more than which number?

**Section 4**

Draw one line of symmetry.

**Section 5**

Emma invited 14 people to her birthday party. 12 people came. How many people weren't able to come?

Section 6

What time is shown on the clock?

**Section 7**

Complete the sequence:

52, 54, 56, , ,

**Section 8**

$$13 + \square = 22$$

$$\square - 9 = 12$$

$$4 \times \square = 8$$

Section 1

Put the correct operation into the calculations to complete the number sentences.

$$24 \quad \square \quad 11 = 13$$

$$10 \quad \square \quad 6 = 60$$

$$34 \quad \square \quad 43 = 77$$

Section 2

What time is shown on the clock?



Section 3

What unit of measurement is used to measure the length of a film? Tick your answer.

- km m
 seconds £
 minutes

Section 4

26 people visited a museum. 18 were adults. How many were children?

Section 5

Tick the coins that make 65p.



Section 6

What 3D shape has one curved face and no vertices?

Section 7

Zac had 40p. He spent 28p. He got two coins in his change. What coins were they?



Section 8

26 is 17 more than what number?

Section 1

Fill in the missing numbers.

20, 18, , , 12,

**Section 2**

Alice has 20p.
Sweets cost 5p each. How many can she buy?

**Section 3**

What number is five less than 21?

Section 4

$$14 + \square = 20$$

$$17 + \square = 25$$

$$18 - \square = 9$$

Section 5

A square has how many corners?

Section 6

Tick the sphere.

**Section 7**

Carry on the sequence.

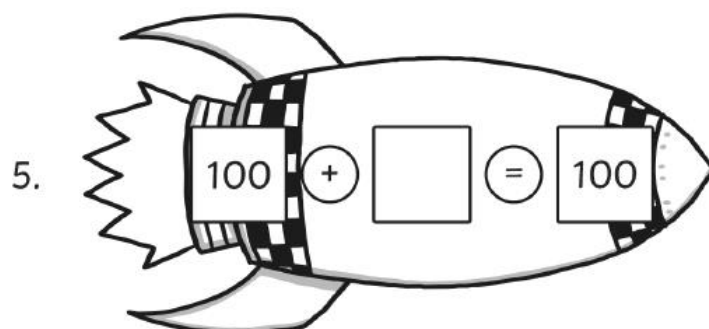
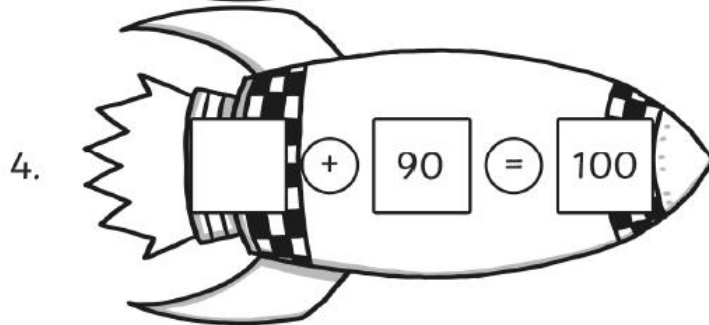
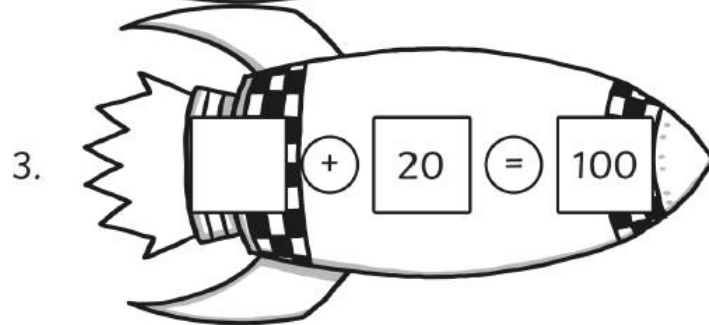
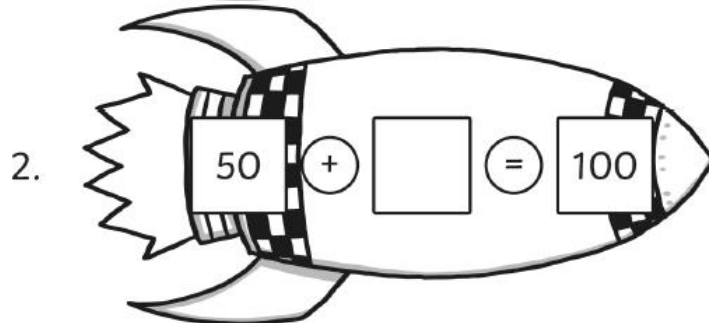
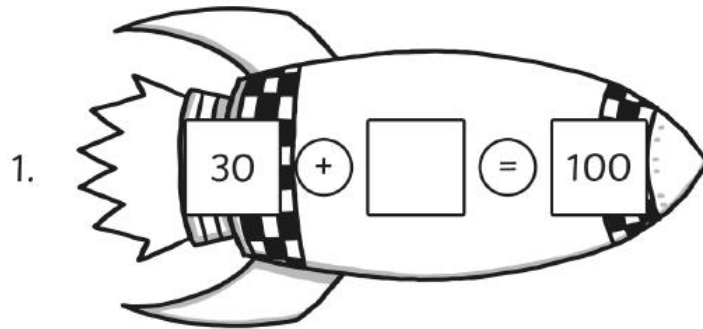
45, 55, 65, , ,

**Section 8**

If $28 = 20 + 8$, then $31 =$

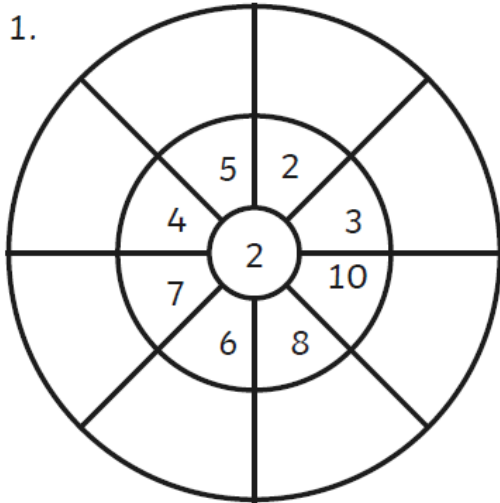
Rocket Race to 100

Can you find the missing numbers to make a total of 100?

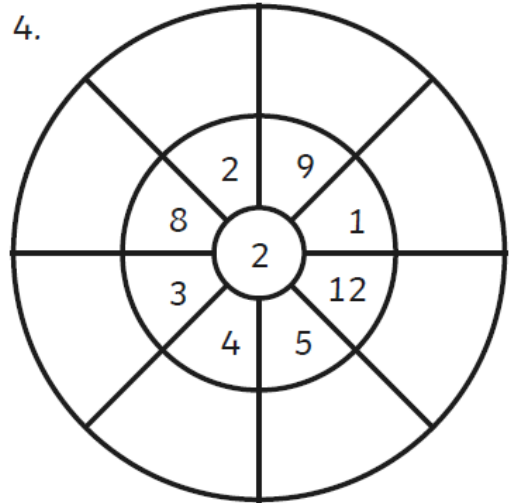


Multiply the number written in the middle circle by each of the numbers next to it. Write your answers on the outer circle.

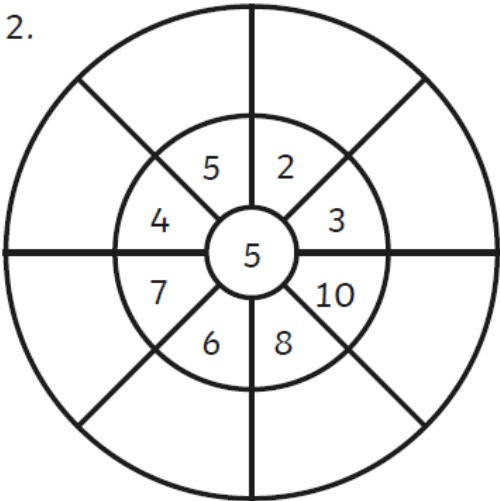
1.



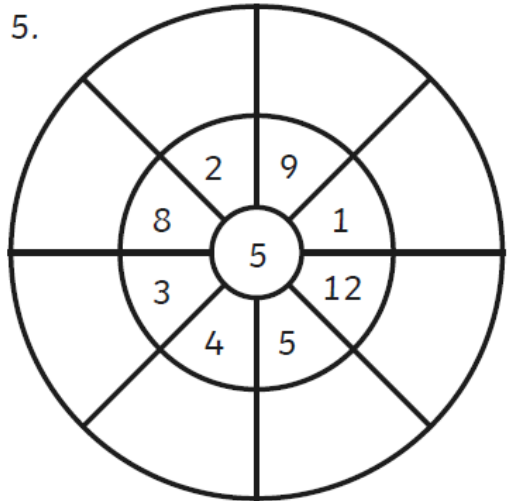
4.



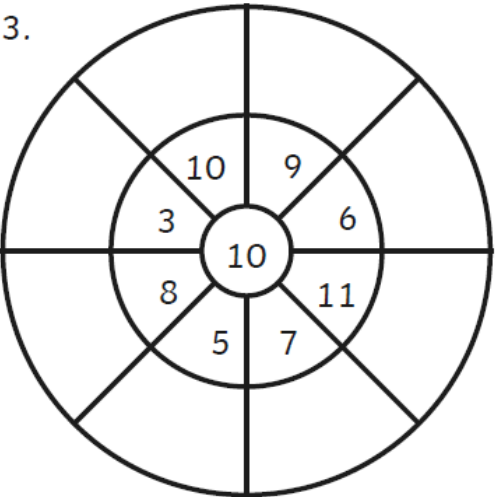
2.



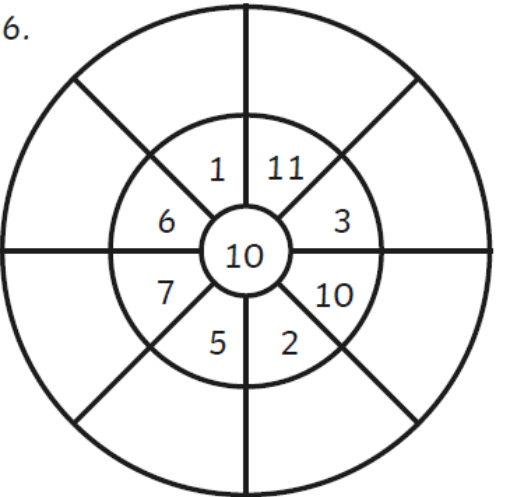
5.



3.



6.





Stay
safe!