


Week 4 activities





The Planet Zog

What Does It Look Like?

The planet Zog is a gigantic, brown planet that floats 400 million light years away from Earth. The planet's surface is made of chocolate and lumpy cream cheese.

Who Lives There?

The creatures that live on Zog are called zargles. They are strange, furry aliens with nine eyes, a lion's mane and a horse's tail. They also have a horn, just like a unicorn, right in the middle of their fluffy faces. What odd-looking monsters they are!

Would you like to visit the planet Zog?

Quick Questions



1. What two things is Zog made of?



2. Which adjective has the author used to show that zargles are peculiar to look at?

3. How long do you think it would take to get to planet Zog?



4. Would you like to visit planet Zog? Why or why not?





Who Is Buzz Aldrin?

Edwin 'Buzz' Aldrin was born on 20th January 1930, in America. When he was younger, his sister called him Buzz. People have continued to call him this throughout his life.

What Is He Famous For?

In 1969, along with two other astronauts, Buzz travelled on a spacecraft called Apollo 11. The shuttle landed and Buzz Aldrin became the second person to walk on the Moon. The walk was shown on live television and was watched by 600 million people all over the world.

Buzz spent over two hours outside of the spacecraft and collected around eighteen kilograms of moon rocks.

Quick Questions



1. Where was Buzz born?



2. In what year did Buzz walk on the Moon?



3. Why do you think so many people watched the Moon landing on television?



4. What do you think happened when Buzz came back to Earth?

a
Add the correct subordinating conjunction to this sentence.

when if

Did you see her face _____ it started snowing?



b
Use two of these words to make one new compound word.

frame land door


c
What type of word is 'sitting' in this sentence? Circle one.

I'm sitting in the sunshine.

verb adjective



d
Which year 2 common exception word has Mr Whoops been juggling with?



e
Find the hidden words.

old	o	l	d	p	n	w
class	h	b	r	e	a	k
told	t	a	a	t	f	o
half	o	y	l	r	h	h
who	l	p	s	f	s	w
break	d	c	l	a	s	s

f
Use this noun phrase and these adjectives to write an expanded noun phrase in a full sentence.

her bag

glittery small

Write a **command** about the picture.

And an **exclamation** (starting with 'What' or 'How').



a

Tick either past or present tense for these sentences.

They all went for a walk.

past tense present tense

My sister is staying at home.

past tense present tense

c

Add commas to the sentence.

They had cats dogs fish birds and rabbits at grandma's.



e

Write two new words by adding the suffixes **-er** and **-est** to the root word...

shiny

Remember you may have to make a change.



d

Look carefully at these homophones. Match the picture to the correct spelling.

be



bee



blue



blew



b

Oops, Mr Whoops has spelt these common exception words backwards! Write them correctly, four times each, to help him.

ynam _____

htab _____

ruoh _____

ssap _____



f

'ea' Spelling Activity

1. Trace over 'ea'.


ea ea ea ea ea
ea ea ea ea ea

2. Just add 'ea'.

t__	cr__m
__st	s__t
rep__t	s__l
n__t	st__m

3. Write the correct 'ea' words under the pictures.





'a-e' Spelling Activity

1. Trace over 'a-e'.

a e a e a e a e
a e a e a e a e

2. Just add 'a-e'.

g _ t _

fl _ m _

c _ k _

sp _ c _

g _ z _

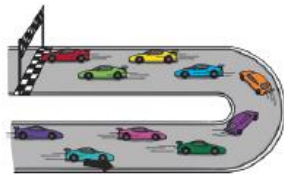
sn _ k _

r _ c _


am _ z _

3. Write the correct 'a-e' words under the pictures.





Colour by Multiplication



4	grey
6	light green
8	dark green
10	pink
12	orange
14	skin colour
16	bright pink
18	black

Tip:

Remember, you can multiply numbers in any order - so 2×7 is the same as 7×2 !

Section 1

Circle true or false

$12 + 13 = 26$ True / False

$15 - 6 = 9$ True / False


$4 \times 10 = 40$ True / False

Section 2

What is a five-sided shape called?

Section 3

What fraction is shaded?



Section 4

There are 12 bees and beetles. Seven of the insects are beetles. How many are bees?



Section 5

What is the total of the coins?



Section 6

Which rope is the shortest?





Section 7

Put these numbers in order, largest to smallest.

34, 61, 14, 86, 55

Section 8

 = 2  = 5  = 10

 x  =

Crack the Codes under the Sea

a	b	c	d	e	f	g	h	i	j	k	l	m
1	2	3	4	5	6	7	8	9	10	11	12	13
n	o	p	q	r	s	t	u	v	w	x	y	z
14	15	16	17	18	19	20	21	22	23	24	25	26

20 - 5 = _____ 20 - 17 = _____ 10 + 10 = _____ 10 + 5 = _____ 8 + 8 = _____ 30 - 9 = _____ 25 - 6 = _____											
10 + 9 = _____ 4 + 4 = _____ 30 - 29 = _____ 11 + 7 = _____ 25 - 14 = _____											
30 - 7 = _____ 100 - 92 = _____ 45 - 44 = _____ 7 + 5 = _____ 65 - 60 = _____											
2 + 2 = _____ 35 - 20 = _____ 23 - 11 = _____ 29 - 13 = _____ 3 + 5 = _____ 12 - 3 = _____ 9 + 5 = _____											
89 - 70 = _____ 50 - 42 = _____ 8 + 10 = _____ 39 - 30 = _____ 6 + 7 = _____ 11 + 5 = _____											
6 + 13 = _____ 27 - 10 = _____ 14 + 7 = _____ 2 + 7 = _____ 28 - 24 = _____											

