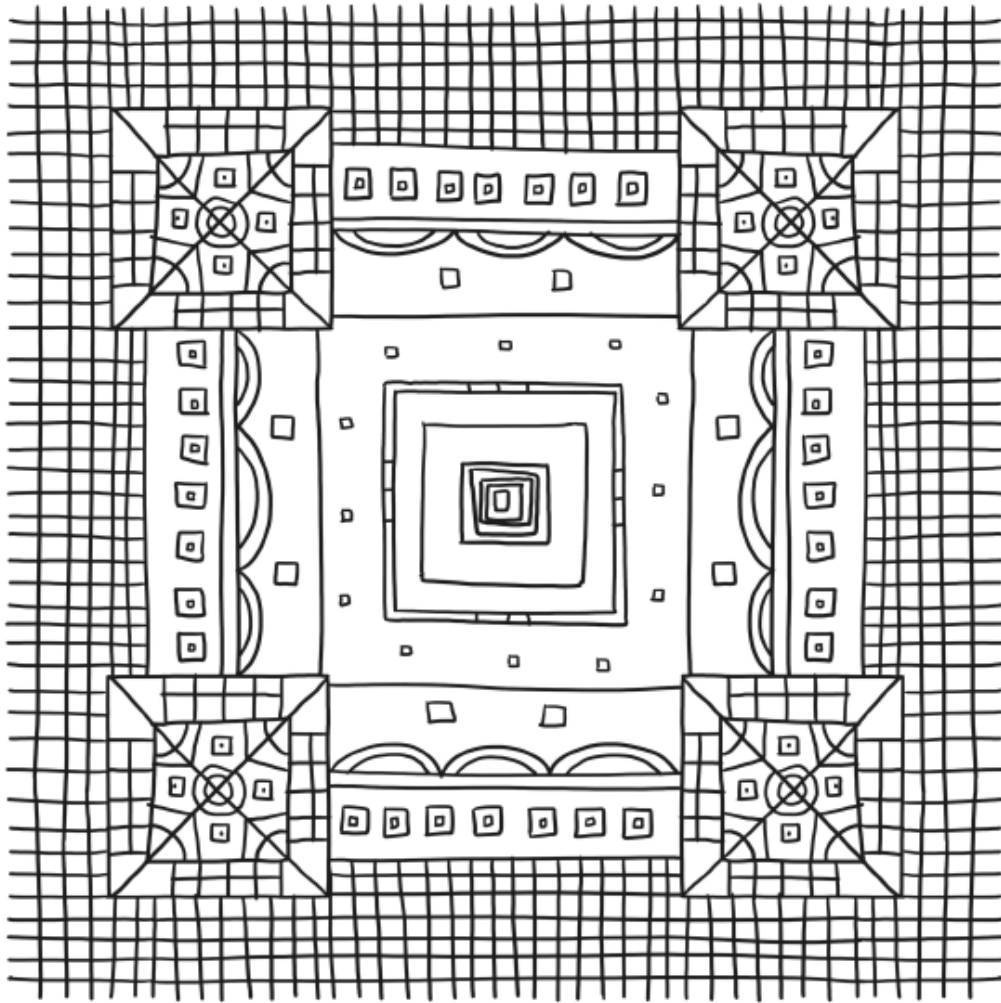


Week 7



A Helicopter Tour of London

8 Welcome aboard this tour of London, the capital
16 city of England. Below us, over eight million
26 people are living and working in one of the most
35 exciting cities in the world. You can see the
42 famous River Thames flowing through the city
50 and some rowers practising for their yearly boat
60 race. The Thames is full of slimy eels and oysters.
69 Would you like to try some? Beside the Thames,
78 you can see the Tower of London, where the
88 crown jewels are kept, and over in the distance is
95 Buckingham Palace, where the Queen and her
102 royal family live. Underneath the ground in
108 London is the famous underground railway,
118 known as the 'tube'. What a fantastic city this is!



Quick Questions



1. Match these places to what you would find there.

River Thames

crown jewels

Tower of London

The Queen

Buckingham Palace

eels and oysters



2. How does the author feel about London? Use evidence from the text to support your answer.



3. What might the passengers see next on the tour?



4. Which word from the text means the same as 'next to'?

All About Africa

9 Africa is a continent which is bigger than the
17 United States of America, Canada and India put
26 together. Africa is home to 54 countries and more
34 than one billion people. In Northern Africa, you
43 can trek through the Sahara desert; it is the
53 largest and driest hot desert in the world. You can
61 also visit the world's longest river, The Nile.
71 Millions of people visit Africa on holiday to see its
79 famous pyramids and go on animal safaris. In
88 Africa, you will find some of the largest mammals
97 on the planet. Among them are the elephant, the
105 giraffe and the world's fastest land mammal, the
106 cheetah.



1. Number these facts from 1 to 3 to show the order they appear in the text.

- You can trek through the Sahara desert.
- Millions of people visit the famous pyramids.
- Africa is home to 54 countries.



2. Find and copy two mammals from the text that you may find in Africa.



3. Why might people come to Africa to look at animals on a safari?



4. 'You can trek through the Sahara desert.'
In this sentence, what does 'trek' mean?

Find these words in the word searches. Can you spell them without looking at them first?

Common Exception Words

d o o r d f l o o r y s
h w f r b e h i n d w z
p z i s c d z f g h c j
o l n n o p q r s t h v
o x d m z z c w z f i h
r j k i n d o i q r l t
e v w n s z a l j d d f
g j i d k z m d o p r z
c l i m b x y z a b e d
z f g h c h i l d n n p
q r t z d j y x z z a b
b e c a u s e j k z m n



door
floor
poor
because

find
kind
mind
behind

child
children
wild
climb



Common Exception Words




m o s t e f t h i p k l
m n o p q r o t u r w x
o z a b c d l f g e i j
n l m g o l d r s t u v
l x y z l b c d t t g h
y j k l d n o p e y r t
u v w x y z a b a d e f
g h i j b r e a k p a r
o l d v w x y z a b t d
e f g h i j k l m n o p
q r s t e v e r y z a b
b o t h g h i j k l m n



most
only
both
old

cold
gold
told
every

great
break
steak
pretty



Oh no! Mr Whoops is getting in a muddle. Tick the sentence he should use.

a

- She's going to see her family.
- Shees went to see her family?



Write a question sentence about this picture. Questions ask you something and end with a question mark.

b



Extend this sentence using the conjunction 'because'.

c

She needed new trainers...



Underline the nouns in this sentence.

d

The baby threw out his blue toys.



Circle the correct homophone for each picture.

e

2

two

too



two

too

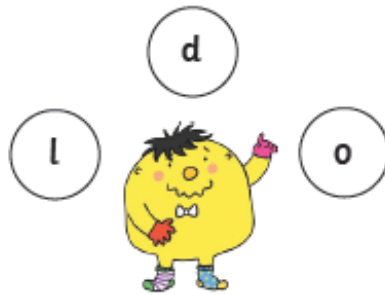
Tick the statement sentence.

f

- I am going to go swimming in the sea.
- Don't swim past the flags!



Which year 2 common exception word has Mr Whoops been juggling with?



Improve this sentence by creating an expanded noun phrase.

She had a _____
_____ toy for her birthday.



Underline the compound word in this sentence.

All the children put their hands up for popcorn.



Finish this sentence in the past tense.

We _____
_____ the shopping into the house.



Circle the conjunction in this sentence.

My friends asked me to play but I had to finish my homework.



Write these two words as one word, using an apostrophe.

do not

Section 1

$6 \times 2 = \square \quad \square \div 2 = 8$

$3 \times 5 = \square \quad \square \div 2 = 5$

Use these numbers to fill the boxes:

4, 8, 2

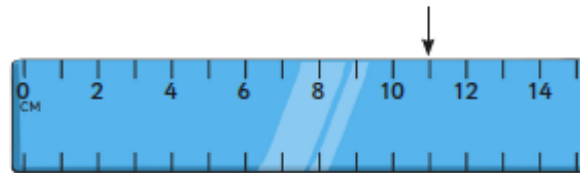
$\square \div \square = \square$

Section 2

I am a number. If you add 2 to me, then double the answer, you get 20. What am I?

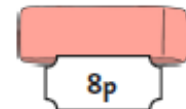
Section 3

What number would the arrow be pointing to?




Section 4

Lucy wanted to buy some scissors and a rubber. How much would it cost her?



Section 5

Draw a line of symmetry.



Section 6

Sort the words that mean + or -

| + | - |
|---|---|
| | |

times take away minus
subtract add altogether
sum of less than

Section 7

Ed has been counting his marbles. He has put them into piles of 10. He has 9 piles. How many marbles does he have?



Section 8

There are 9 crayons in a red box and 16 in a blue box. Which box has more crayons. How many more?



Section 1

Along a road, there are 20 street lamps. 11 of them are not working. How many lamps are working?

Section 2

Put these numbers in order, smallest to largest:

82 28 18 48 89

| | | | | |
|--|--|--|--|--|
| | | | | |
|--|--|--|--|--|

smallest

largest


Section 3

This table shows the number of girls and boys who have red or black cars in one class. Find the totals.

| Car colour | Girls | Boys | Total |
|------------|-------|------|-------|
| Red | 12 | 3 | |
| Black | 9 | 8 | |

Section 4

Draw the hands on the clock to show this time: 3:00



Section 6

I have a pound coin.

I buy a lolly for 25p.

How much change will I be given?

Which coins could I be given in change?

Section 7

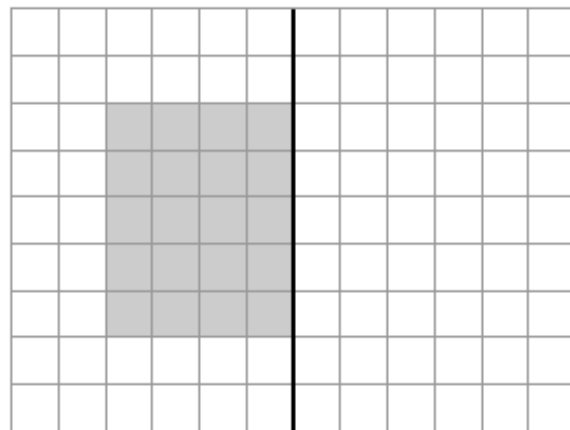
Write a number sentence which has the same answer as:

$24 - 4 =$

$12 + 7 =$

Section 8

Draw the reflection of the shape.



Section 5

What 2D shape is at both ends of a cylinder?

E.g. For the first question, you could write $10 + 10$, or $40 - 20$, or 4×5 ...

School Jokes Code Breaker Creator

Use this sheet to create some school joke code breakers. Use this table of matching numbers and letters to make your number sentences.

| | | | | | | | | | | | | |
|----|----|----|----|----|----|----|----|----|----|----|----|----|
| A | B | C | D | E | F | G | H | I | J | K | L | M |
| 1 | 2 | 3 | 4 | 5 | 6 | 7 | 8 | 9 | 10 | 11 | 12 | 13 |
| N | O | P | Q | R | S | T | U | V | W | X | Y | Z |
| 14 | 15 | 16 | 17 | 18 | 19 | 20 | 21 | 22 | 23 | 24 | 25 | 26 |

What's the king of all school supplies?

| | Answer | Letter |
|--|--------|--------|
| | 20 | T |
| | 8 | H |
| | 5 | E |
| | 18 | R |
| | 21 | U |
| | 12 | L |
| | 5 | E |
| | 18 | R |

If you had 13 apples, 12 grapes, 2 pineapples and 8 strawberries, what would you have?

| | Answer | Letter |
|--|--------|--------|
| | 6 | F |
| | 18 | R |
| | 21 | U |
| | 9 | I |
| | 20 | T |
| | 19 | S |
| | 1 | A |
| | 12 | L |
| | 1 | A |
| | 4 | D |

How do bees get to school?

| | Answer | Letter |
|--|--------|--------|
| | 19 | S |
| | 3 | C |
| | 8 | H |
| | 15 | O |
| | 15 | O |
| | 12 | L |
| | 2 | B |
| | 21 | U |
| | 26 | Z |
| | 26 | Z |

What does a snake learn at school?

| | Answer | Letter |
|--|--------|--------|
| | 8 | H |
| | 9 | I |
| | 19 | S |
| | 19 | S |
| | 20 | T |
| | 15 | O |
| | 18 | R |
| | 25 | Y |