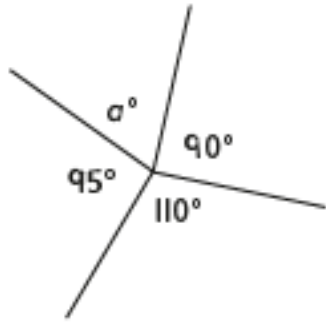
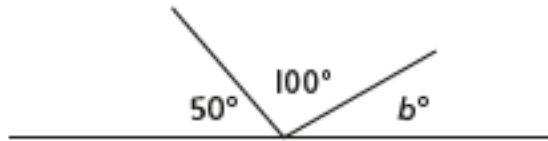


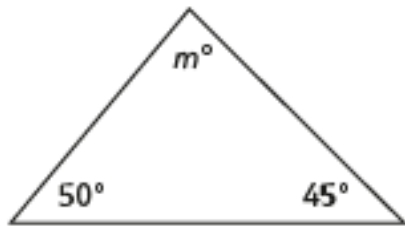
Work out the missing angles.



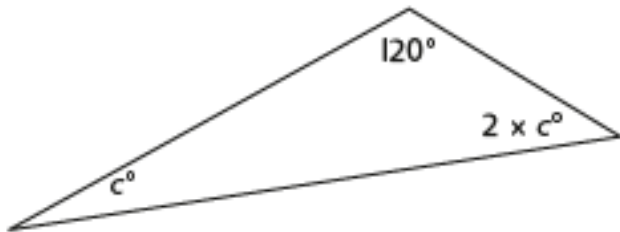
$a =$ _____



$b =$ _____

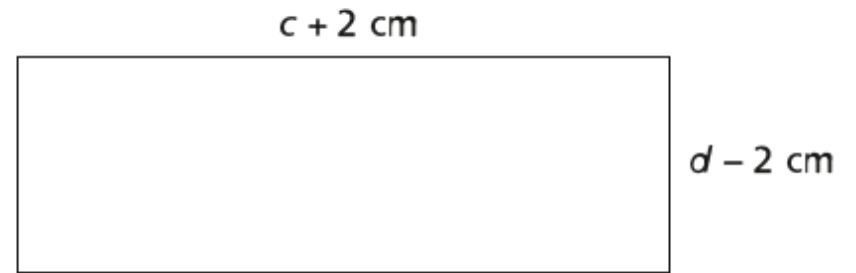


$m =$ _____



$c =$ _____

The perimeter of a rectangle is 32 cm and the area is 48 cm^2 .



What are the lengths of the sides of the rectangle?

What length is c ?

What length is d ?

Hint: Think about half the perimeter.