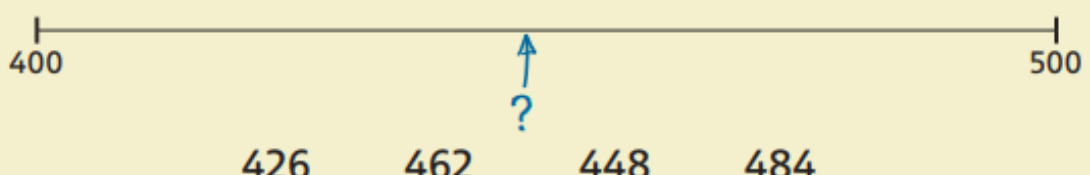
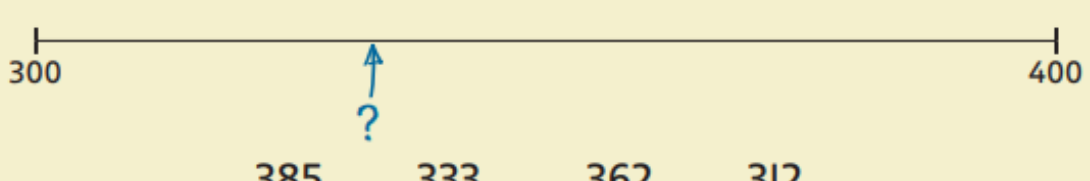

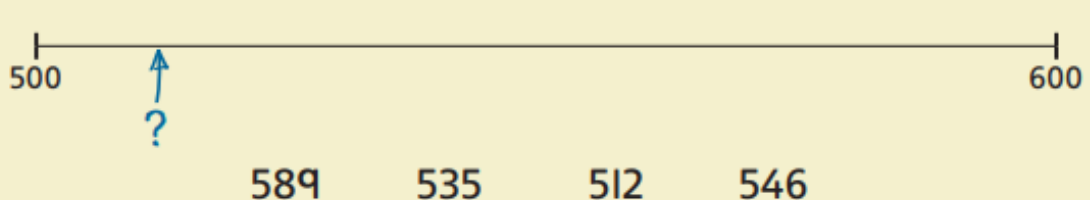


Sketch the following number lines.

- 1 From 200 to 300. Mark 280 and circle the nearest hundred.
- 2 From 400 to 500. Mark 440 and circle the nearest hundred.
- 3 From 100 to 200. Mark 160 and circle the nearest hundred.
- 4 From 600 to 700. Mark 620 and circle the nearest hundred.
- 5 From 900 to 1000. Mark 970 and circle the nearest hundred.

Which of the numbers is the arrow pointing to?

- 6  A horizontal number line from 400 to 500. Ticks are at 400 and 500. Four numbers are marked: 426, 462, 448, and 484. An arrow points to a question mark between 462 and 448.
- 7  A horizontal number line from 300 to 400. Ticks are at 300 and 400. Four numbers are marked: 385, 333, 362, and 312. An arrow points to a question mark between 385 and 333.
- 8  A horizontal number line from 700 to 800. Ticks are at 700 and 800. Four numbers are marked: 746, 734, 794, and 762. An arrow points to a question mark between 734 and 794.
- 9  A horizontal number line from 500 to 600. Ticks are at 500 and 600. Four numbers are marked: 589, 535, 512, and 546. An arrow points to a question mark between 500 and 589.