

## Maths

### 15.3.21

1. Continue the sequences by counting forwards and backwards in 4s, 8s, 50s and 100s:

- a) 4, 8, 12, \_\_\_\_\_, \_\_\_\_\_, \_\_\_\_\_
- b) 24, 32, 40, \_\_\_\_\_, \_\_\_\_\_, \_\_\_\_\_
- c) 900, 800, 700, \_\_\_\_\_, \_\_\_\_\_, \_\_\_\_\_
- d) 150, 200, 250, \_\_\_\_\_, \_\_\_\_\_, \_\_\_\_\_

2. What number is 10 more than 73? \_\_\_\_\_

3. What number is 100 less than 340? \_\_\_\_\_

4. Underline the tens digit in the following numbers:

562      584      703      821

5. Write a number so that each sentence makes sense:

- a)  $345 < \underline{\hspace{2cm}}$
- b)  $294 > \underline{\hspace{2cm}}$
- c)  $833 = \underline{\hspace{2cm}}$

6. Order the following numbers from largest to smallest:

77   86   78   84   74

---

Largest

Smallest

1. Order these numbers from smallest to largest:

289      298      258      247      293

---

Smallest

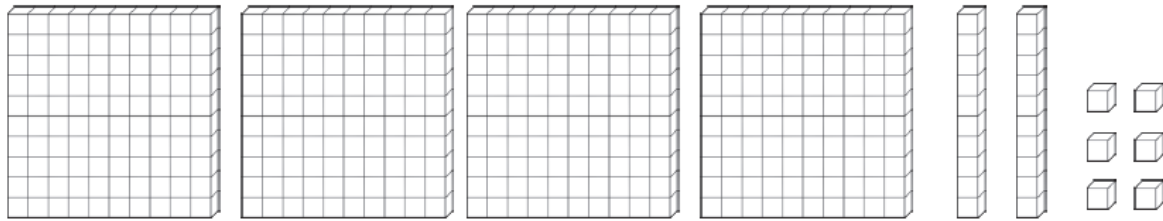
Largest

### 16.3.21

## Maths

1. What number is shown? \_\_\_\_\_

(Tip: The squares are 100s, the sticks are 10s and the cubes are 1s).



2. Write 357 in words.

\_\_\_\_\_

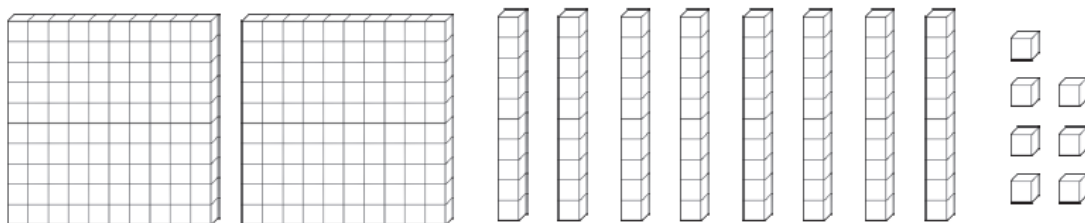
3. Write two hundred and seventy-four in numerals (numbers).

\_\_\_\_\_

4. What needs to be added to the following number to make 234?

$$204 + \underline{\quad\quad\quad} = 234$$

5. Cross out the dienes that are not needed to represent the number 162.



6. Calculate the following:

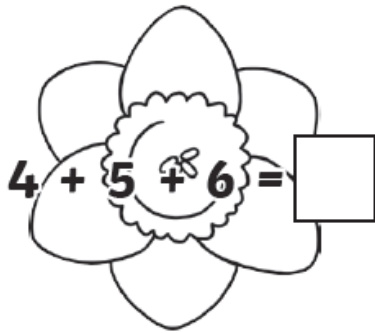
a)  $286 + 4 = \underline{\quad\quad\quad}$

b)  $256 - 30 = \underline{\quad\quad\quad}$


c)  $172 + 300 = \underline{\quad\quad\quad}$

# Spring Addition and Subtraction

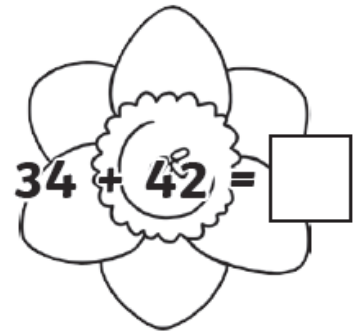
Find the answers to these calculations and write them in the flowers.



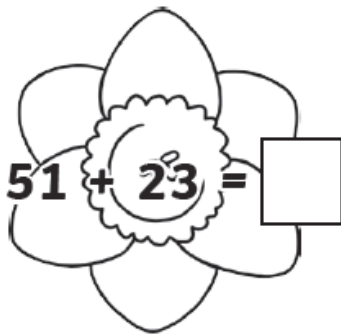
$4 + 5 + 6 = \square$



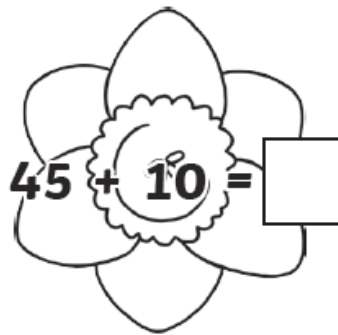
$8 + 7 = \square$



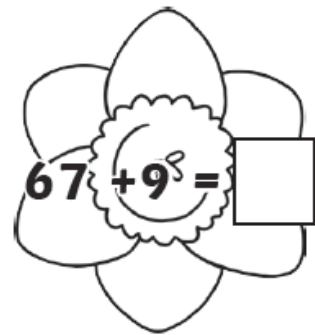
$34 + 42 = \square$



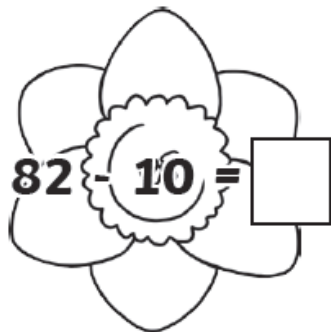
$51 + 23 = \square$




$45 + 10 = \square$



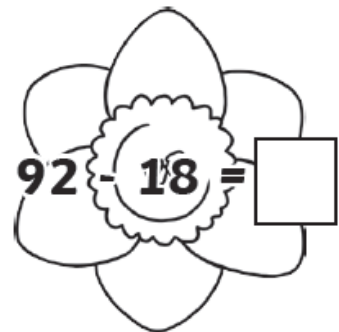
$67 + 9 = \square$



$82 - 10 = \square$



$93 - 22 = \square$



$92 - 18 = \square$

Now look at your answers. If the answer has **7 tens**, colour the flower yellow. If the answer has **5 ones**, colour the flower blue.





If you get stuck, use the number square on the next page to help you:

## Maths

1	2	3	4	5	6	7	8	9	10
11	12	13	14	15	16	17	18	19	20
21	22	23	24	25	26	27	28	29	30
31	32	33	34	35	36	37	38	39	40
41	42	43	44	45	46	47	48	49	50
51	52	53	54	55	56	57	58	59	60
61	62	63	64	65	66	67	68	69	70
71	72	73	74	75	76	77	78	79	80
81	82	83	84	85	86	87	88	89	90
91	92	93	94	95	96	97	98	99	100

## Marvellous Milkshakes

Here are the prices of some different milkshake flavours in the shops. Draw two different combinations of coins you could use to pay for each one.

 <b>Toffee Surprise</b> 28p	 <b>Marvellous Marshmallow</b> 35p	 <b>Choco Chip</b> 41p	 <b>Nutty Delight</b> 66p
--	---	--	--

Toffee Surprise

Marvellous Marshmallow

Choco Chip

Nutty Delight



Use the coins word mat on the next page to help you.

Maths

# British Coins Word Mat



**1p**  
One Penny



**2p**  
Two Pence



**5p**  
Five Pence



**10p**  
Ten Pence



**20p**  
Twenty Pence



**50p**  
Fifty Pence













**£1**  
One Pound



**£2**  
Two Pounds

# Counting Mixed Coins

Count the coins and write your answers in pence or pounds and pence.

<p>1.</p>  <p>How much? _____</p>	<p>2.</p>  <p>How much? _____</p>
<p>3.</p>  <p>How much? _____</p>	<p>4.</p>  <p>How much? _____</p>
<p>5.</p>  <p>How much? _____</p>	<p>6.</p>  <p>How much? _____</p>
<p>7.</p>  <p>How much? _____</p>	<p>8.</p>  <p>How much? _____</p>
<p>9.</p>  <p>How much? _____</p>	<p>10.</p>  <p>How much? _____</p>