

3a. Draw the shape using the description below.

- The shape has:
- 4 equal sides
  - 4 right angles

3b. Draw the shape using the description below.

- The shape has:
- 4 right angles
  - 2 sets of 2 equal sides

3a. Draw the shape using the description below.



- The shape has:
- 4 equal sides
  - 4 right angles



3b. Draw the shape using the description below.



- The shape has:
- 4 right angles
  - 2 sets of 2 equal sides



 What shape have you drawn? VF  What shape have you drawn?

 What shape have you drawn? VF  What shape have you drawn?

<p>7a. Draw the shape using the description below.</p> <p>The shape has:</p> <ul style="list-style-type: none"> <li>• 4 sides</li> <li>• No right angles</li> <li>• 2 sets of parallel lines</li> </ul> <p> What shape have you drawn? <small>VF</small></p>	<p>7b. Draw the shape using the description below.</p> <p>The shape has:</p> <ul style="list-style-type: none"> <li>• 4 equal sides</li> <li>• Not a square</li> </ul> <p> What shape have you drawn? <small>VF</small></p>
--	--

<p>7a. Draw the shape using the description below.</p> <p>The shape has:</p> <ul style="list-style-type: none"> <li>• 4 sides</li> <li>• No right angles</li> <li>• 2 sets of parallel lines</li> </ul> <p> What shape have you drawn? <small>VF</small></p>	<p>7b. Draw the shape using the description below.</p> <p>The shape has:</p> <ul style="list-style-type: none"> <li>• 4 equal sides</li> <li>• Not a square</li> </ul> <p> What shape have you drawn? <small>VF</small></p>
---	--

<p>11a. Draw the shape using the description below.</p> <p>The shape has:</p> <ul style="list-style-type: none"> <li>• 2 pairs of equal length sides</li> <li>• No right angles</li> <li>• Not a parallelogram</li> </ul> <p> What shape have you drawn? <small>VF</small></p>	<p>11b. Draw the shape using the description below.</p> <p>The shape has:</p> <ul style="list-style-type: none"> <li>• 2 equal sides</li> <li>• 2 parallel sides (unequal in length)</li> <li>• No right angles</li> </ul> <p> What shape have you drawn? <small>VF</small></p>
---	---

<p>11a. Draw the shape using the description below.</p> <p>The shape has:</p> <ul style="list-style-type: none"> <li>• 2 pairs of equal length sides</li> <li>• No right angles</li> <li>• Not a parallelogram</li> </ul> <p> What shape have you drawn? <small>VF</small></p>	<p>11b. Draw the shape using the description below.</p> <p>The shape has:</p> <ul style="list-style-type: none"> <li>• 2 equal sides</li> <li>• 2 parallel sides (unequal in length)</li> <li>• No right angles</li> </ul> <p> What shape have you drawn? <small>VF</small></p>
--	---

Use this information to draw the one shape that is being described:

Two pairs of parallel sides	The area is $24\text{cm}^2$
Four right angles	The shape's perimeter is numerically larger than its area.
Length of each side is an even number	The shape is irregular
The shape is a quadrilateral	The shape has two lines of symmetry

Use this information to draw the one shape that is being described:

Two pairs of parallel sides	The area is $24\text{cm}^2$
Four right angles	The shape's perimeter is numerically larger than its area.
Length of each side is an even number	The shape is irregular
The shape is a quadrilateral	The shape has two lines of symmetry

