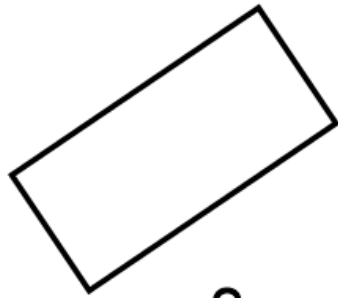
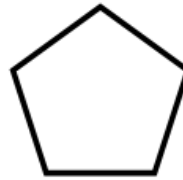


2



3



4



5



6

Read the description and draw the polygons

7) It is a triangle. None of its sides are equal but two of them are perpendicular

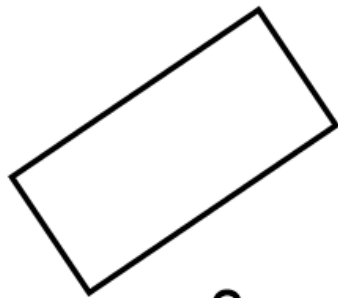
8) It is a regular shape that has only right angles

9) It is a quadrilateral with one pair of parallel sides. It has two acute and two obtuse angles.

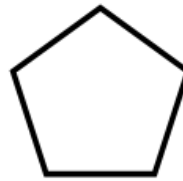
10) It has four sides. One pair of its sides is parallel. It has two right angles. None of the sides are the same length.



2



3



4



5



6

Read the description and draw the polygons

7) It is a triangle. None of its sides are equal but two of them are perpendicular

8) It is a regular shape that has only right angles

9) It is a quadrilateral with one pair of parallel sides. It has two acute and two obtuse angles.

10) It has four sides. One pair of its sides is parallel. It has two right angles. None of the sides are the same length.