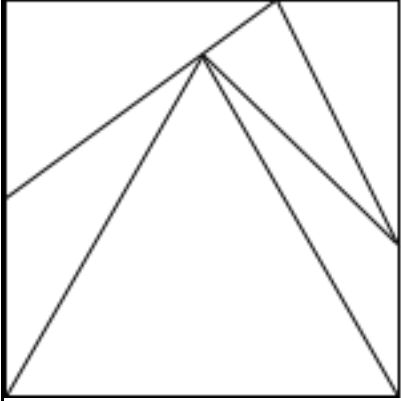
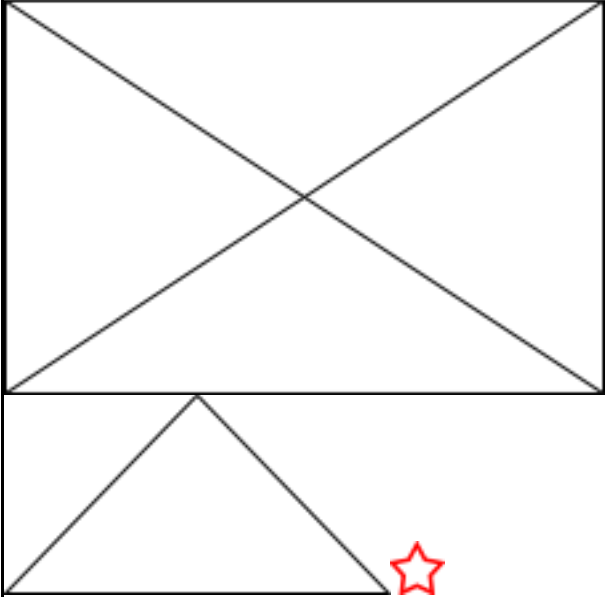
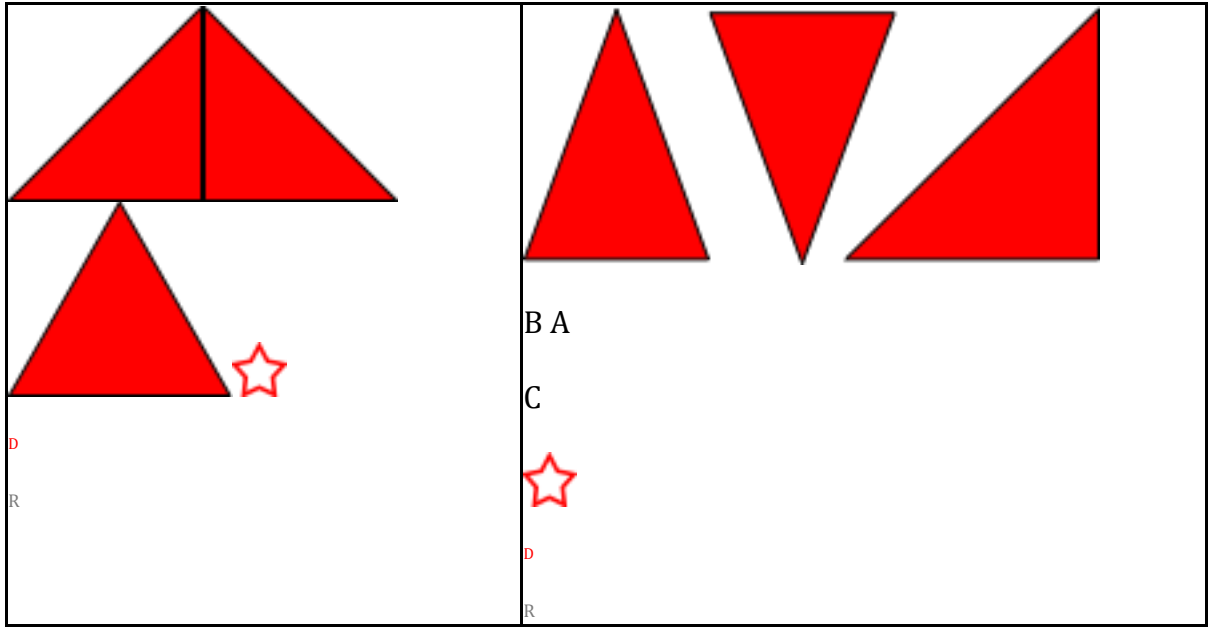


Reasoning and Problem Solving – Triangles

<p>1a. Which triangles in this image are scalene? Use a ruler to help.</p>  <p style="text-align: right;">★</p> <p>D PS</p>	<p>1b. Which triangles in this image are isosceles? Use a ruler to help.</p>  <p style="text-align: right;">★</p> <p>D PS</p>
<p>2a. Which statement is always true?</p> <ol style="list-style-type: none"> 1. An equilateral triangle has three equal angles. 2. An isosceles triangle has three equal angles. <p>★</p> <p>D PS</p>	<p>2b. Which statement is always true?</p> <ol style="list-style-type: none"> 1. An isosceles triangle has one right angle. 2. A scalene triangle has no equal sides. <p>D PS</p> <p>★</p>
<p>3a. Which triangle is the odd one out? Why?</p> <p>AC</p> <p>B</p>	<p>3b. Which triangle is the odd one out? Why?</p>



B A

C



D

R