

Name: _____

Class: _____ Date: _____

1 Solve the following **additions**.

a) $15\,364 + 1\,000 =$

b) $7\,658 + 100 =$

2 Solve the following **subtractions**.

a) $13\,728 - 100 =$

b) $25\,608 - 1\,000 =$

3 Solve these **multiplications**.

a) $3 \cdot 19 \times 10 =$

b) $0 \cdot 15 \times 100 =$

4 Solve these **divisions**.





a) $456 \div 100 =$

b) $8 \cdot 3 \div 10 =$

5 Complete these **additions** to get to the next **whole number**.

a) $7 \cdot 3 +$ $= 8$

b) $0 \cdot 2 +$ $= 1$



For teacher use

Your mark	_____ out of 10
What went well	
How to improve	