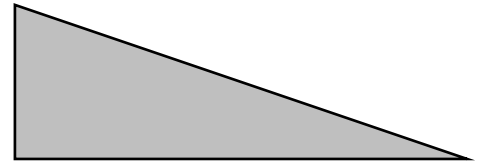


Measure to the nearest tenth of a cm

Use a ruler to measure this shape and find its perimeter

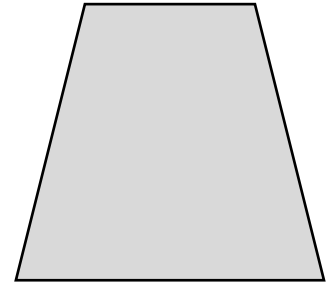
Circle the word/words that describe this triangle:

Equilateral Scalene Isosceles Right-angled



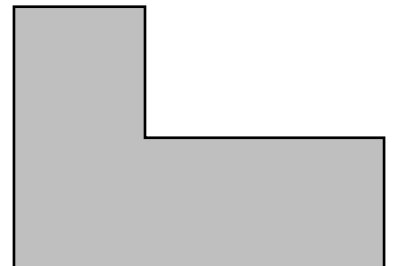
Use a ruler to measure this shape and find its perimeter. _____

Is there a short cut to do this that you can find? Explain why/why not.



Use a ruler to measure this shape and find its perimeter. _____

Is there a short cut to do this that you can find? Explain why/why not.



Rounding and adding

Adam buys second hand things that cost, £0.85 £1.43 £2.90 £5.09 £13.50 £8.36 £7.28

- 1) Round each number to the nearest pound then add these new numbers together to get an estimate for the total cost.
- 2) Add the actual costs together to get the real total.
- 3) Work out the difference between your estimate and the actual total.